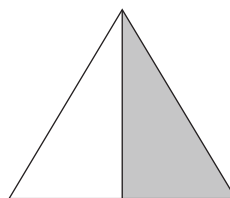

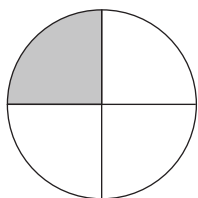


DIAGNOS RB1

Namn _____ Klass _____

1 Hur stor del av figuren är skuggad?

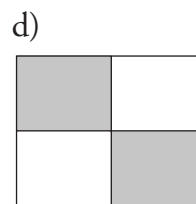
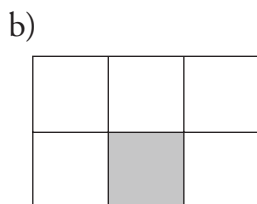
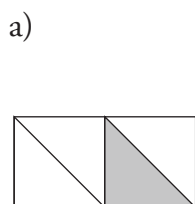


a) _____


b) _____

c) _____

2 Ringa in alla figurer där en fjärdedel är skuggad.




3 a) Skugga en sjättedel av figuren.



b) Skugga en fjärdedel av figuren.



c) Skugga en tredjedel av figuren.




DIAGNOS RB1

4 Skugga en fjärdedel av dessa figurer.


a)



b)



c)



5 Skriv med siffror (i bråkform)

a) en tredjedel _____

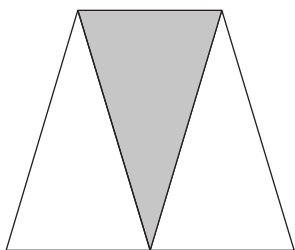
b) en halv _____

c) en sjättedel _____


d) en fjärdedel _____

6 Ringa in alla figurer där $\frac{1}{3}$ är skuggad?

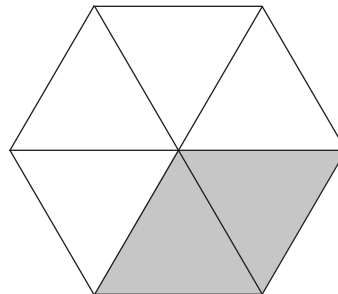
a)



b)




c)

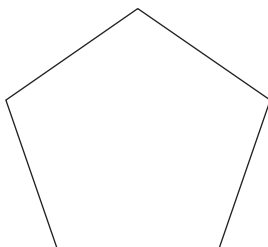


7 Skugga $\frac{1}{5}$ av följande figurer.

a)



b)



c)

