

# DIAGNOS GFo3

Namn \_\_\_\_\_ Klass \_\_\_\_\_

**1** Vilka av de här figurerna är: (skriv nummer)

a) rektanglar? \_\_\_\_\_

b) trianglar? \_\_\_\_\_

c) kvadrater? \_\_\_\_\_

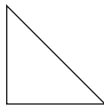
d) romber? \_\_\_\_\_

e) parallelogrammer? \_\_\_\_\_

1)



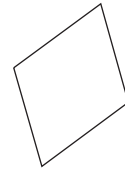
2)



3)




4)



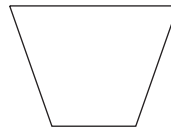
5)



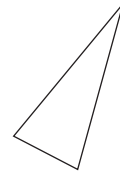
6)



7)



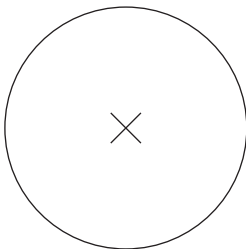
8)



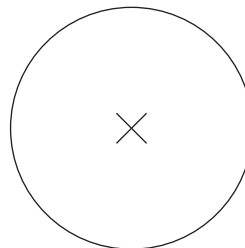
**2** Rita in en diameter i cirkel a.

Rita in en radie i cirkel b.

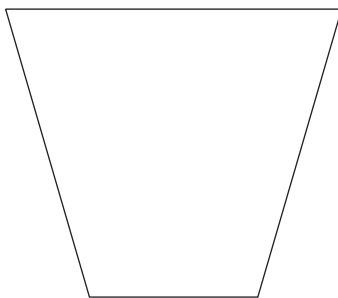
a)



b)



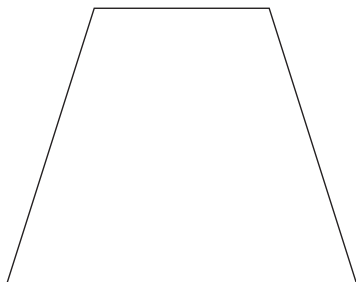
**3** I den här figuren är två sidor parallella. Sätt ett x på de sidorna.



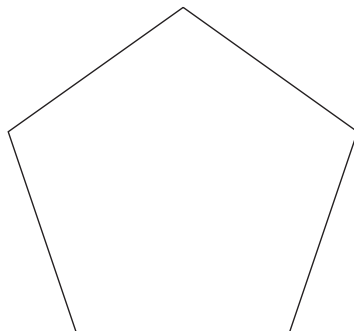
# DIAGNOS GFo3

**4** Rita alla diagonaler du kan i de här figurerna figurer.

a)



b)



c)

